

## Billanook College – Unit 2 Chemistry

### Term 4 Test 2017 – Reactions in water

Name: \_\_\_\_\_

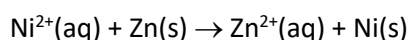
44 marks

#### SECTION A

1. Which of the following equations represents a reaction in which the  $\text{Fe}^{2+}$  ion is behaving as a reductant?

- A.  $\text{Fe}^{2+}(\text{aq}) + 2\text{OH}^{-}(\text{aq}) \rightarrow \text{Fe}(\text{OH})_2(\text{s})$
- B.  $\text{Fe}^{2+}(\text{aq}) + \text{Ag}^{+}(\text{aq}) \rightarrow \text{Fe}^{3+}(\text{aq}) + \text{Ag}(\text{s})$
- C.  $2\text{Fe}^{2+}(\text{aq}) + \text{Mg}(\text{s}) \rightarrow 2\text{Fe}(\text{s}) + \text{Mg}^{2+}(\text{aq})$
- D.  $\text{Fe}^{2+}(\text{aq}) + \text{S}^{2-}(\text{aq}) \rightarrow \text{FeS}(\text{s})$

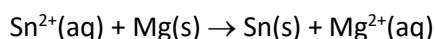
2. For the reaction



which of the following statements is correct?

- A.  $\text{Zn}(\text{s})$  is oxidised and  $\text{Ni}^{2+}(\text{aq})$  is the reductant.
- B.  $\text{Zn}(\text{s})$  is reduced and  $\text{Ni}^{2+}(\text{aq})$  is the oxidant.
- C.  $\text{Zn}(\text{s})$  is oxidised and  $\text{Ni}^{2+}(\text{aq})$  is the oxidant.
- D.  $\text{Zn}(\text{s})$  is reduced and  $\text{Ni}^{2+}(\text{aq})$  is the reductant.

3. Consider the following equation.



Which of the following represents one of the two half-equations of this full equation?

- A.  $\text{Sn}^{2+}(\text{aq}) \rightarrow \text{Sn}(\text{s}) + 2\text{e}^{-}$
- B.  $\text{Mg}(\text{s}) + 2\text{e}^{-} \rightarrow \text{Mg}^{2+}(\text{aq})$
- C.  $\text{Mg}^{2+}(\text{aq}) + 2\text{e}^{-} \rightarrow \text{Mg}(\text{s})$
- D.  $\text{Sn}^{2+}(\text{aq}) + 2\text{e}^{-} \rightarrow \text{Sn}(\text{s})$

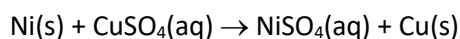
4. When a piece of cobalt metal,  $\text{Co}$ , is added to a solution of tin(II) ions,  $\text{Sn}^{2+}$ , in a beaker

- A.  $\text{Sn}^{2+}(\text{aq})$  ions will be oxidised.
- B. cobalt atoms will be oxidised.
- C. no reaction will occur.
- D.  $\text{Sn}^{2+}(\text{aq})$  ions will act as the reductant.

5. When a piece of iron metal,  $\text{Fe}$ , is added to a solution of zinc ions,  $\text{Zn}^{2+}$ , in a beaker

- A. iron atoms will be oxidised.
- B.  $\text{Zn}^{2+}(\text{aq})$  ions will be oxidised.
- C.  $\text{Zn}^{2+}(\text{aq})$  ions will act as the oxidant.
- D. no reaction will occur.

6. Several small pieces of nickel, Ni, are added to a solution of copper(II) sulfate, which is blue in colour. The equation for this reaction is given below.



Which of the following observations would be made?

- A. A deposit of copper would form and the nickel pieces would dissolve.
  - B. The nickel pieces would dissolve and the copper(II) sulfate solution would become a more intense blue colour.
  - C. No reaction would occur.
  - D. A precipitate of nickel sulfate would form and the copper(II) sulfate solution would become a less intense blue colour.
7. Which of the following correctly lists the coefficients for the following half-equation?
- $$\_\_ \text{MnO}_4^- \text{(aq)} + \_\_ \text{H}^+ \text{(aq)} + \_\_ \text{e}^- \rightarrow \_\_ \text{Mn}^{2+} \text{(aq)} + \_\_ \text{H}_2\text{O(l)}$$
- A. 1, 1, 1, 1, 1
  - B. 1, 2, 1, 1, 1
  - C. 1, 8, 7, 1, 4
  - D. 1, 8, 5, 1, 4

*For Questions 8-10, assume the temperature is 25°C*

8. What is the pH of a 1.0M solution of HCl?

- A. 0
- B. 1
- C. 3
- D. 13

9. What is the pH of a 1.0M solution of CH<sub>3</sub>COOH?

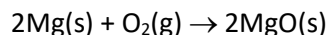
- A. 0
- B. 1
- C. 3
- D. 13

10. What is the pH of a 1.0M solution of Ba(OH)<sub>2</sub>?

- A. -0.3
- B. 13.7
- C. 14.0
- D. 14.3

## SECTION B

1. When heated, magnesium reacts with oxygen gas to form magnesium oxide. An equation for this reaction is



- (a) Write a half-equation, including states, for the reaction involving magnesium.

\_\_\_\_\_

- (b) Is the half-reaction involving oxygen an oxidation or reduction reaction? \_\_\_\_\_

- (c) Give the formula of the oxidant in the above reaction. \_\_\_\_\_

[3 × 1 = 3 marks]

2. The corrosion of iron (as steel) is a huge cost to an industrialised society. There is a range of methods by which such corrosion can be reduced. These include

Method I: sacrificial protection with a more reactive metal

Method II: surface protection

Method III: the formation of a hard, protective oxide coating

For each of the following examples choose one of the four methods to state (*an explanation is not required*) how the iron (as steel) is protected. Methods may be selected more than once.

- (a) covering the body of a car with many layers of paint \_\_\_\_\_  
(b) attaching zinc blocks to the steel 'legs' of a Bass Strait gas-drilling platform \_\_\_\_\_  
(c) coating the steel, Fe, of a food can with tin \_\_\_\_\_  
(d) coating steel, Fe, roofs with zinc in a process called galvanising \_\_\_\_\_

[4 × 1 = 4 marks]

3. Write balanced chemical equations for the following reactions, including states:

- a. Barium chloride solution is mixed with potassium sulfate solution.

- i. Full equation:

\_\_\_\_\_

- ii. Ionic equation:

\_\_\_\_\_

- iii. Type of reaction: \_\_\_\_\_

- b. The two-stage ionisation of the diprotic sulfuric acid,  $\text{H}_2\text{SO}_{4(\text{aq})}$  in water:

\_\_\_\_\_

\_\_\_\_\_

c. The reaction between solid calcium and dilute nitric acid,  $\text{HNO}_{3(\text{aq})}$ .

i. Full equation:

---

ii. Ionic equation:

---

iii. Type of reaction: \_\_\_\_\_

d. The oxidation of ethanol,  $\text{C}_2\text{H}_5\text{OH}_{(\text{aq})}$  to ethanoic acid,  $\text{CH}_3\text{COOH}_{(\text{aq})}$  by dichromate,  $\text{Cr}_2\text{O}_7^{2-}_{(\text{aq})}$ . The reaction happens in an acidic environment (ie. balance with  $\text{H}^+$  ions and water as needed) and another product of the reaction is  $\text{Cr}^{3+}_{(\text{aq})}$ .

i. Oxidation half equation:

---

ii. Reduction half equation:

---

iii. Unsimplified full equation:

---

---

iv. Simplified full equation:

---

---

[12 marks]

4. Examine the online advertisement below:

**ANODE SWAP**  
HOT WATER SYSTEM ANTI-CORROSION EXPERTS


Home   Anodes   Water Valves   FAQ's   Contact Us

### Anode Swap

Anode Swap is a Perth owned and operated company servicing the greater Perth metropolitan area, the south west and the Goldfields.  
Anode Swap was formed as too many households in Western Australia are replacing their storage hot water systems prematurely, when all that is required is an anode replacement. Regularly replacing the sacrificial anode is by far the most cost effective method of extending the life of your storage hot water system and ensuring you have good quality hot water for your family.  
We specialise in the supply and fitting of Sacrificial anodes in all makes of gas, electric and solar hot water systems. We also replace hot and cold water pressure relief valves.  
So give us a call for your obligation free hot water system inspection

An anode is a magnesium rod which is designed

Also on the page:



Source: [www.anodeswap.com](http://www.anodeswap.com)

The hot water systems where these anodes are used have an enamel (paint)-coated steel cylinder.

(Don't forget there is an electrochemical series in the data booklet.)

a. Write the oxidation half equation showing what would happen to the steel in the absence of the magnesium:

---

b. Write the oxidation half equation showing how the magnesium acts as a sacrificial anode:

---

c. Write the relevant reduction half equation. This involves reduction of oxygen in the presence of water:

---

d. Hence write the overall redox equation for occurring in a hot water tank with an **intact** anode:

---

e. Write the overall redox equation for occurring in a hot water tank with an **exhausted** anode. Describe the result of this reaction being allowed to occur:

---

[6 marks]

5. The iron content of a fertiliser can be determined by titrating a solution of the fertiliser with potassium permanganate solution. In this redox titration, the intense purple of the permanganate ion will be reduced to colourless  $\text{Mn}^{2+}$  ions. Therefore, as is common with redox titrations, it is self-indicating, ie. there is no need for addition of an indicator.

Juddy's Supa Boost Iron Fertiliser\* will "banish yellow leaves forever." The analysis on the packet says it contains 13.0% Fe as  $\text{FeSO}_4$ .

A 2.687g sample of the fertiliser was weighed into a beaker and about 100mL of deionised water was used to dissolve all the soluble components by stirring for several minutes. The beaker's contents were then filtered, making sure that the beaker was thoroughly washed out with deionised water into the filter paper. 20mL of 1M  $\text{H}_2\text{SO}_{4(aq)}$  was then added to the filtrate and it was transferred to a 250.0 mL volumetric flask and the volume made up to the calibration line. Therefore all of the iron in the fertiliser sample is now assumed to be in the 250.0 mL volumetric flask.

20.00 mL aliquots of the fertiliser solution were titrated with 0.0100M  $\text{KMnO}_4$  solution. As the permanganate reacts with the iron, the deep purple colour disappears. Therefore the end point is when a small excess cannot be swirled out and the aliquot remains pale pink. The average titre was found to be 10.13 mL.

The overall titration reaction is:



a. Write the oxidation half equation: \_\_\_\_\_

b. What is the purpose of adding the sulfuric acid to the filtrate? \_\_\_\_\_

c. Calculate the amount, in mole, of permanganate,  $\text{MnO}_4^-$ , in the average titre.

d. State the mole ratio of iron(II) to permanganate:

e. Calculate the amount, in mole, of  $\text{Fe}^{2+}$  in each aliquot.

f. Calculate the mass, in grams, of  $\text{Fe}^{2+}$  in each aliquot.

g. Calculate the mass, in grams, of  $\text{Fe}^{2+}$  in the 250.0 mL volumetric flask.

h. Calculate the % by mass of iron in the fertiliser.

i. Is Juddy's Supa Boost Iron making a reasonable claim about its iron content?

[9 marks]

\*Not available in stores. Special two for the price of one.

But wait, there's more. You also get to work on this problem!

**END OF TEST**